



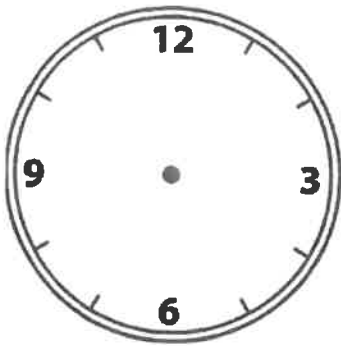
Creating Clocks

Name: _____

Draw the hour and minute hand on the clocks so they represent the time shown.

1)

6:00



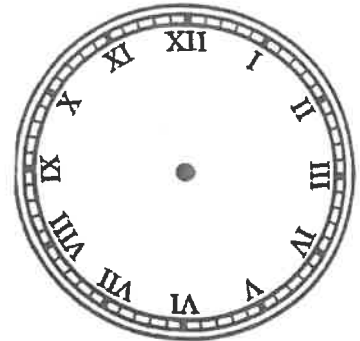
2)

9:15



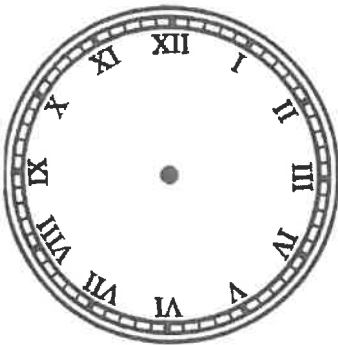
3)

1:00




4)

5:00




5)

1:30



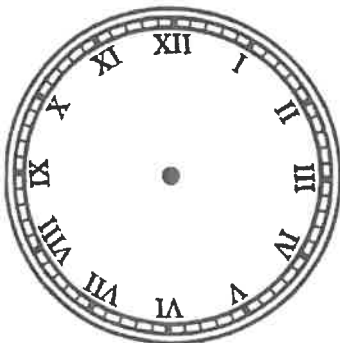
6)

12:30



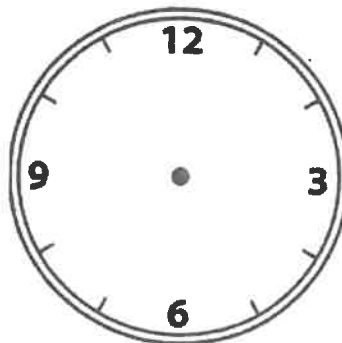
7)

11:45



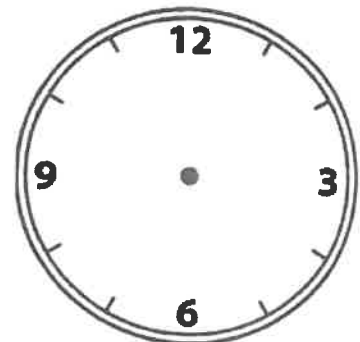
8)

6:15



9)

1:45




Drawing Hands - Quarters

Sheet 1


Draw hands on each clock for the time given below:

1)




Time: 12:45

2)




Time: 9:15

3)




Time: 1:15

4)




Time: 3:30

5)




Time: 7:45

6)




Time: 4:15

7)




Time: 11:15

8)



Time: 2:15

9)









Time: 8:30

NAME _____

DATE _____

Telling Time to the Hour, Half Hour & Quarter Hour

1 What time does each clock show?

<p>example</p>  <p>8:00</p>	<p>a</p> 	<p>b</p> 
<p>c</p> 	<p>d</p> 	<p>e</p> 




CHALLENGE

- 2 Which clock above shows "quarter past eleven"?
- 3 Which clock above shows "quarter till three"?
- 4 Which clock above shows "half past three"?

NAME _____

Riddle 33

Where does a king stay when he goes to the beach?



What To Do

To find the answer to the riddle, solve the multiplication problems. Then, match each product with a letter in the Key below. Write the correct letters on the blanks below.

- | | |
|--|--|
| 1 How many minutes are there in 1 hour? _____ | 6 How many minutes are there in 10 hours? _____ |
| 2 How many minutes are there in 2 hours? _____ | 7 How many minutes are there in 11 hours? _____ |
| 3 How many minutes are there in 4 hours? _____ | 8 How many minutes are there in 15 hours? _____ |
| 4 How many minutes are there in 5 hours? _____ | 9 How many minutes are there in 18 hours? _____ |
| 5 How many minutes are there in 7 hours? _____ | 10 How many minutes are there in 20 hours? _____ |

Key

600 S	1,240 M	900 E
420 C	120 D	450 B
1,200 N	180 X	1,100 I
660 S	300 A	240 A
1,080 T	60 L	360 O











Riddle Answer:

A 6 3 10 2 5 4 7 9 1 8

Summertime Color By Number #5

Telling Time (Page 1)


Name _____

1. What time is it? 	6. What time is it? 
2. What time is it? 	7. What time is it? 
3. What time is it? 	8. What time is it? 
4. What time is it? 	9. What time is it? 
5. What time is it? 	10. What time is it? 

Summertime Color By Number #5

Telling Time (Page 2)

11. What time is it?



16. What time is it?




12. What time is it?




17. What time is it?




13. What time is it?




18. What time is it?



14. What time is it?



19. What time is it?



15. What time is it?



20. What time is it?

