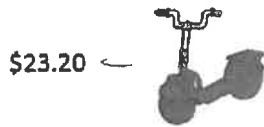


Marvo's Toy Store!



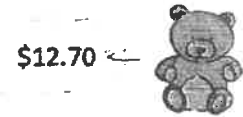
\$23.20 ←

Scooter



\$10.90 ←

Rocking horse



\$12.70 ←

Teddy



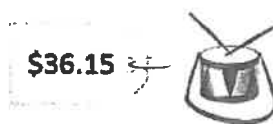
\$5.55 ←

Slingshot



\$27.25 ←

Skateboard



\$36.15 ←

Drum Kit



\$17.95 ←

Ball

Help the shoppers work out how much change they will receive.

Purchase	Total Cost	Amount Tendered	Change (show working)
Eric wants to buy a slingshot and a ball .		<input type="text" value="\$20"/> <input type="text" value="\$10"/>	
Peter wants to buy a drum kit and a rocking horse .		<input type="text" value="\$50"/>	
Leigh wants to buy <u>two skateboards</u> .		<input type="text" value="\$20"/> <input type="text" value="\$50"/>	
Jacqui wants to buy a teddy and a scooter .		<input type="text" value="\$50"/>	

Lyn has saved **\$48**. She wants to know if she can buy a **drum kit** and a **ball**.

Can she afford both? If not, how much more does she need to save?

Making Change
Change from Dollars and Cents
Math Worksheet 1



Name: _____

Mary has this much money, and she wants to buy this donut.



64¢

How much change is left?

John has this much money, and he wants to buy a hot dog.



How much change is left?

Linda has this much money, and she wants to buy a pencil.



How much change is left?

Michael has this much money, and he wants to buy this balloon.



How much change is left?

Story Problems using the Number Line! Spicy Numbers

I donated \$450 to a fund for people affected by the wildfires. My friend donated \$235. How much did we donate together?

Our classroom donated \$590 to a homeless shelter. Another classroom donated \$517. How much did we donate together?

The school garage sale raised \$720. The school bake sale raised \$445.
How much did we raise together?

We raised money to donate to the food bank. My class raised \$479. My
friend's class raised \$450.